



Rechengeschichten

1



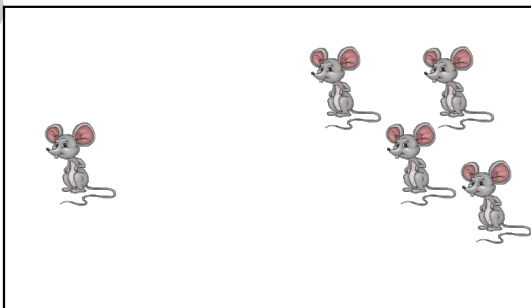
	+		=	
--	---	--	---	--

5




	+		=	
--	---	--	---	--

2




	+		=	
--	---	--	---	--

6



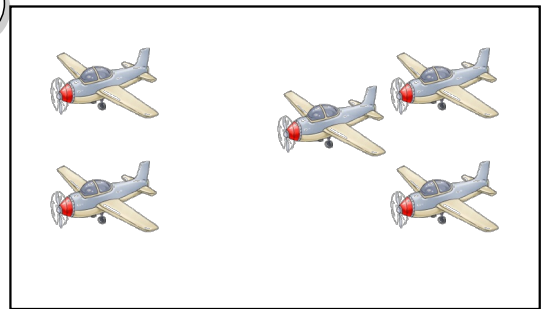
	+		=	
--	---	--	---	--

3



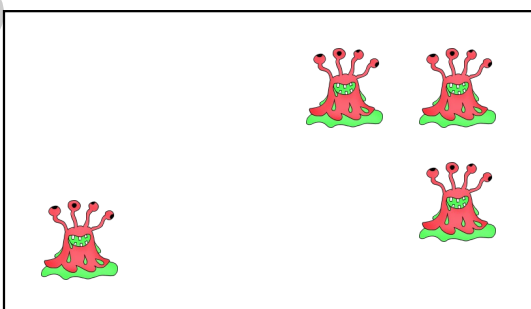
	+			
--	---	--	--	--

7



	+			
--	---	--	--	--

4




--	--	--	--	--


8




--	--	--	--	--



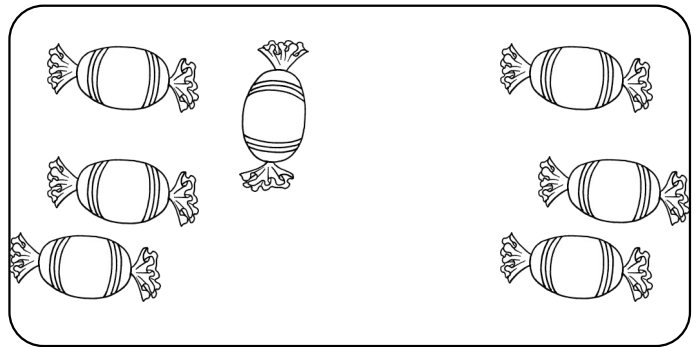
	+		=	
--	---	--	---	--



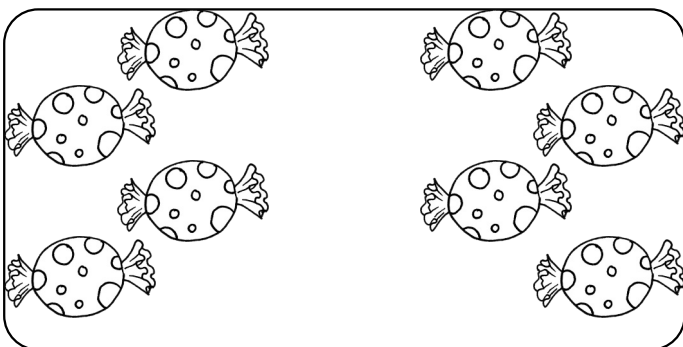
	+		=	
--	---	--	---	--




	+		=	
--	---	--	---	--



	+		=	
--	---	--	---	--




	+		=	
--	---	--	---	--




	+		=	
--	---	--	---	--

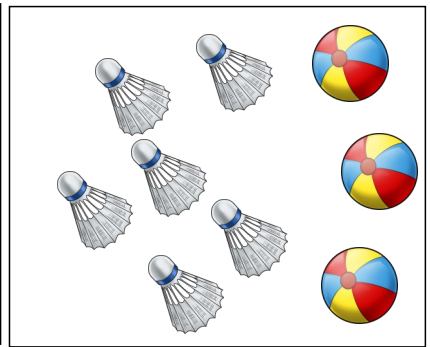
Finde die passende Aufgabe!



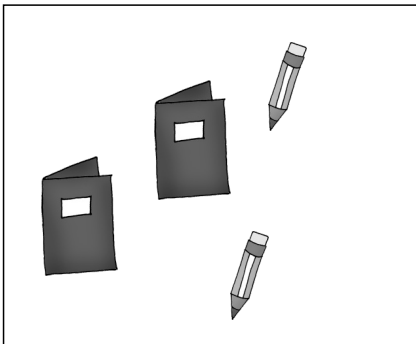
	+		=	
--	---	--	---	--



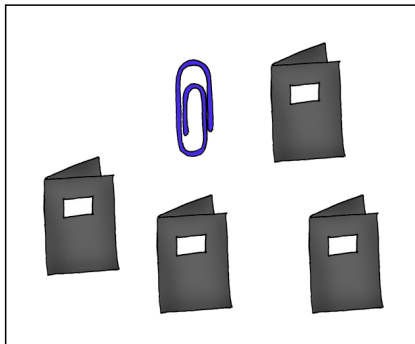
	+		=	
--	---	--	---	--



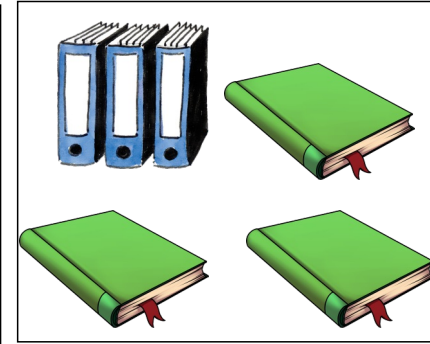
	+		=	
--	---	--	---	--



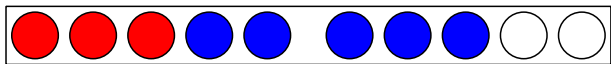
	+		=	
--	---	--	---	--




	+		=	
--	---	--	---	--



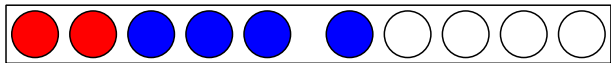
	+		=	
--	---	--	---	--



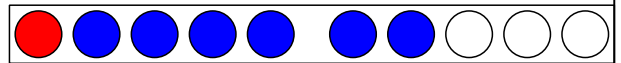
	+		=	
--	---	--	---	--



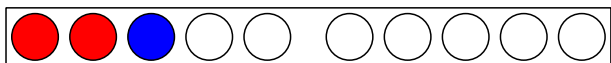
	+		=	
--	---	--	---	--



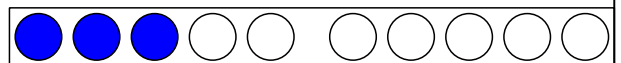
	+		=	
--	---	--	---	--



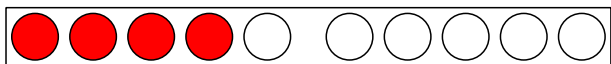
	+		=	
--	---	--	---	--



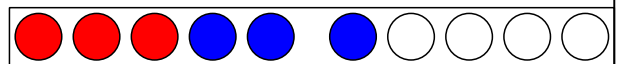
	+		=	
--	---	--	---	--



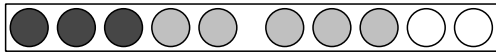
	+		=	
--	---	--	---	--



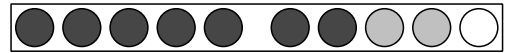
	+		=	
--	---	--	---	--



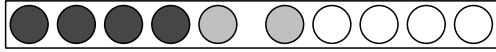
	+		=	
--	---	--	---	--



$$\underline{3} + \underline{5} = \underline{8}$$



$$\underline{\quad} + \underline{\quad} = \underline{\quad}$$



$$\underline{\quad} + \underline{\quad} = \underline{\quad}$$



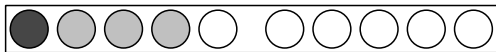
$$\underline{\quad} + \underline{\quad} = \underline{\quad}$$



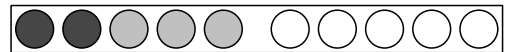
$$\underline{\quad} + \underline{\quad} = \underline{\quad}$$



$$\underline{\quad} + \underline{\quad} = \underline{\quad}$$



$$\underline{\quad} + \underline{\quad} = \underline{\quad}$$



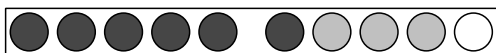
$$\underline{\quad} + \underline{\quad} = \underline{\quad}$$



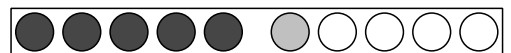
$$\underline{\quad} + \underline{\quad} = \underline{\quad}$$



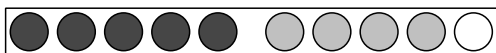
$$\underline{\quad} + \underline{\quad} = \underline{\quad}$$



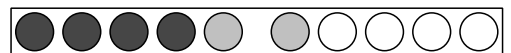
$$\underline{\quad} + \underline{\quad} = \underline{\quad}$$



$$\underline{\quad} + \underline{\quad} = \underline{\quad}$$



$$\underline{\quad} + \underline{\quad} = \underline{\quad}$$



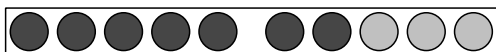
$$\underline{\quad} + \underline{\quad} = \underline{\quad}$$



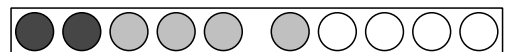
$$\underline{\quad} + \underline{\quad} = \underline{\quad}$$



$$\underline{\quad} + \underline{\quad} = \underline{\quad}$$



$$\underline{\quad} + \underline{\quad} = \underline{\quad}$$



$$\underline{\quad} + \underline{\quad} = \underline{\quad}$$

