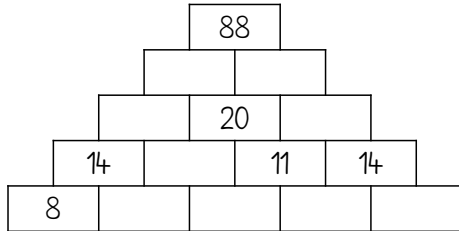
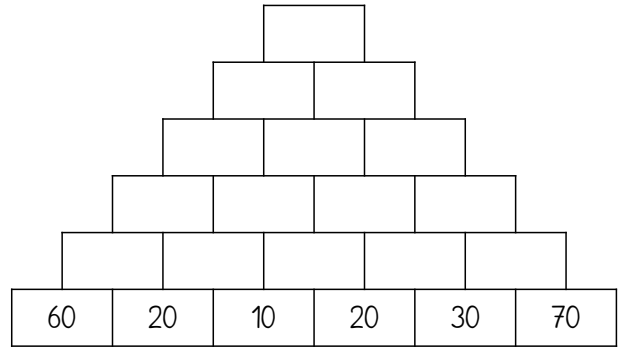
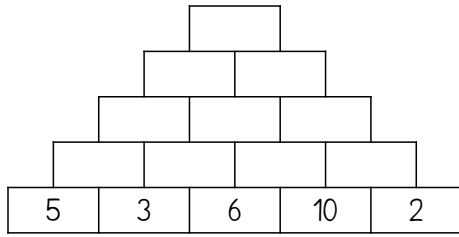


1 Rechenmauern



2 Setze die passenden Rechenzeichen $+$, $-$, \cdot oder $:$.

$4 \bigcirc 5 = 10 \bigcirc 2$

$3 \bigcirc 3 = 18 \bigcirc 2$

$5 \bigcirc 6 = 39 \bigcirc 9$

$6 \bigcirc 4 = 3 \bigcirc 8$

$7 \bigcirc 7 = 9 \bigcirc 5$

$7 \bigcirc 7 = 9 \bigcirc 8$

$5 \bigcirc 3 = 10 \bigcirc 5$

$5 \bigcirc 3 = 12 \bigcirc 4$

$6 \bigcirc 4 = 18 \bigcirc 6$

$8 \bigcirc 4 = 16 \bigcirc 4$

$6 \bigcirc 1 = 10 \bigcirc 2$

$6 \bigcirc 7 = 60 \bigcirc 18$

3 Setze die Muster fort!

